

Name : \_\_\_\_\_

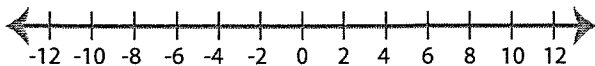
Score : \_\_\_\_\_

## Solving & Graphing Inequalities

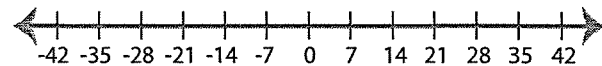
ES1

Solve each inequality and graph the solution.

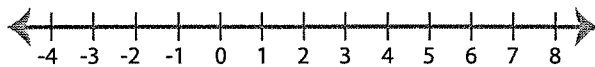
1)  $x - 2 > 4$



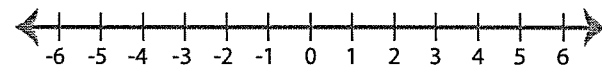
2)  $\frac{x}{3} \leq 7$



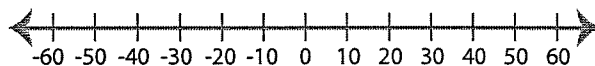
3)  $6x < 30$



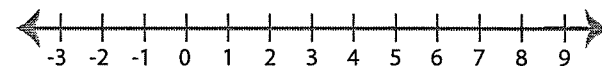
4)  $x + 9 \geq 11$



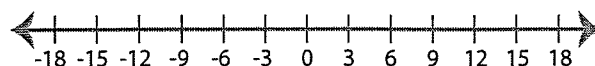
5)  $\frac{x}{2} \geq 10$



6)  $x - 5 \leq 2$



7)  $7 + x < 16$



8)  $4x \geq 32$

