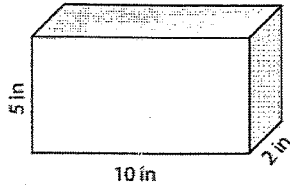


Name \_\_\_\_\_

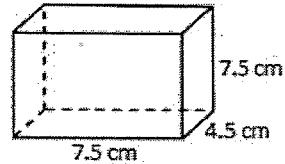
### Math Mugshot.....Volume

Solve each problem. When you are finished, find your answers on the next page. Each answer will correspond to a different feature.

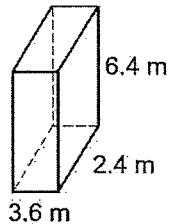
Find the Volume.



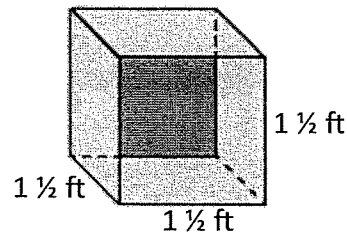
Find the Volume.



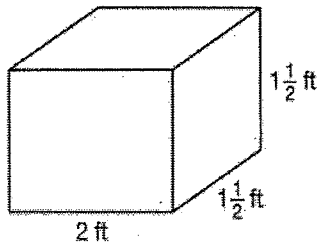
Find the Volume.



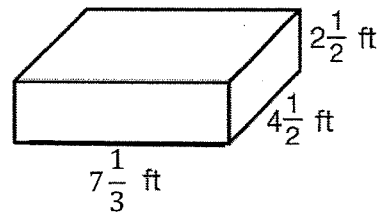
Find the Volume.



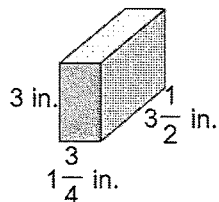
Find the Volume.



Find the Volume.



Find the Volume.



Find the Volume.

$$\text{length} = 4\frac{3}{4} \text{ ft}$$

$$\text{width} = 2 \text{ ft}$$

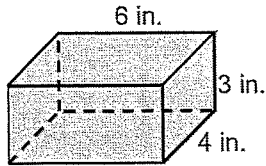
$$\text{height} = 3\frac{1}{4} \text{ ft}$$

Name \_\_\_\_\_

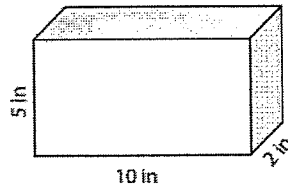
### Math Mugshot.....Surface Area

Solve each problem. When you are finished, find your answers on the next page. Each answer will correspond to a different feature.

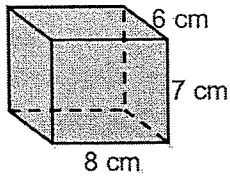
Find the Surface Area.



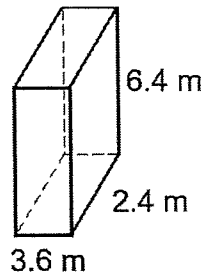
Find the Surface Area.



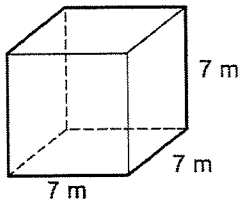
Find the Surface Area.



Find the Surface Area.



























Find the Surface Area.



Find the Surface Area.

Length: 3.1 cm  
Width: 1.2 cm  
Height: 4.75 cm

Volume Answers


|  |  |   |   |
|--|--|---|---|
| 160<br>Draw this mouth.               | $18\frac{3}{8}$<br>Draw a guitar in his hand.         | 100<br>Draw these eyes.                | $82\frac{1}{2}$<br>Draw these shoes.         |
| $3\frac{3}{8}$<br>Draw these ears.    | 55.296<br>Draw this hair.                             | 52.5<br>Draw a car on his shirt.       | 50<br>Draw baseballs in the background.      |
| 246<br>Draw watermelon on his shirt.  | 94.08<br>Draw this mouth.                             | 18.75<br>Draw these eyes.              | 45.12<br>Draw an umbrella in his hand.       |
| 3<br>Draw a bat in his hand.          | 8.64<br>Draw these ears.                              | $125\frac{1}{6}$<br>Draw these shoes.  | 62.875<br>Draw this hair.                    |
| 43.75<br>Draw these shoes.            | $30\frac{7}{8}$<br>Draw raindrops in the background.  | 73.5<br>Draw these ears.               | $4\frac{1}{2}$<br>Draw flames on his shirt.  |
| $6\frac{1}{8}$<br>Draw this hair.     | 17<br>Draw music notes in the background.             | 253.125<br>Draw this mouth.            | 19.5<br>Draw these eyes.                     |

Surface Area Answers

|                                      |   |  |  |
|--------------------------------------|---|--|--|
| 147<br>Color the shirt blue.         | 120<br>Color the hair red.                  | 48.29<br>Color the object in his hand red. | 36.89<br>Color the pants black.              |
| 292<br>Color the shoes yellow.       | 180<br>Color the object in his hand orange. | 49<br>Color the background object yellow.  | 343<br>Color the hair brown.                 |
| 146<br>Color the hair black.         | 76.8<br>Color the background object blue.   | 80<br>Color the shirt red.                 | 84<br>Color the shoes blue.                  |
| 72<br>Color the pants khaki (brown). | 54<br>Color the object in his hand green.   | 196<br>Color the pants blue.               | 47.04<br>Color the background object orange. |
| 336<br>Color the shoes black.        | 294<br>Color the background object green.   | 94.08<br>Color the hair blonde.            | 55.295<br>Color the shirt pink.              |
| 160<br>Color the shirt black.        | 108<br>Color the pants red.                 | 24.14<br>Color the shoes red.              | 100<br>Color the object in his hand yellow.  |

Finish coloring the picture with your choices of colors. Be creative.

# WANTED



Mugshot created by: \_\_\_\_\_